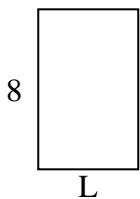


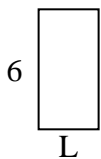


Determine the value of 'L'.

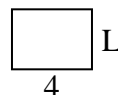
1) Area = $40u^2$



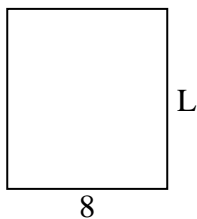
2) Area = $18u^2$



3) Area = $12u^2$



4) Area = $72u^2$



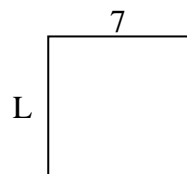
5) Area = $4u^2$



6) Area = $40u^2$



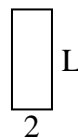
7) Area = $49u^2$




8) Area = $32u^2$



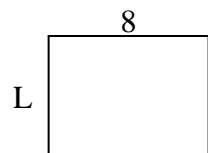
9) Area = $10u^2$



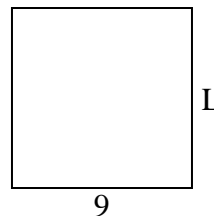
10) Area = $24u^2$



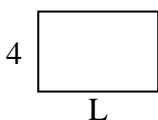
11) Area = $48u^2$



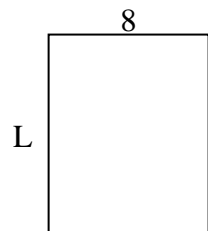
12) Area = $81u^2$



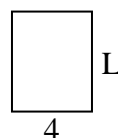
13) Area = $24u^2$



14) Area = $80u^2$



15) Area = $20u^2$



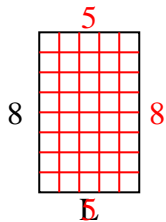
Answers

1. _____
2. _____
3. _____
4. _____
5. _____
6. _____
7. _____
8. _____
9. _____
10. _____
11. _____
12. _____
13. _____
14. _____
15. _____

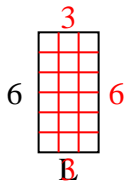


Determine the value of 'L'.

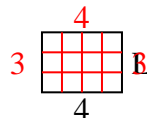
1) Area = $40u^2$



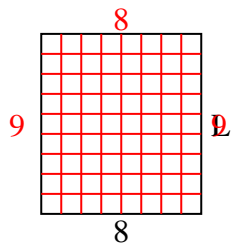
2) Area = $18u^2$



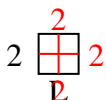
3) Area = $12u^2$



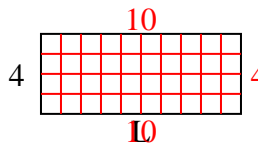
4) Area = $72u^2$



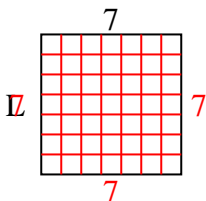
5) Area = $4u^2$



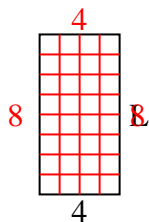
6) Area = $40u^2$



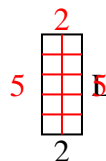
7) Area = $49u^2$



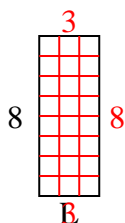
8) Area = $32u^2$



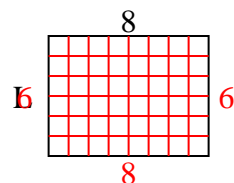
9) Area = $10u^2$



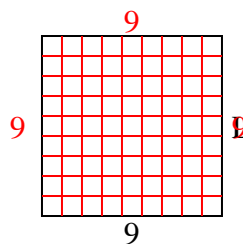
10) Area = $24u^2$



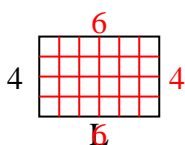
11) Area = $48u^2$



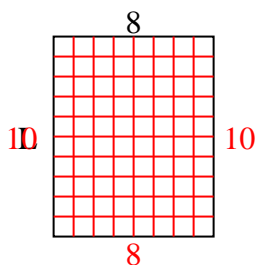
12) Area = $81u^2$



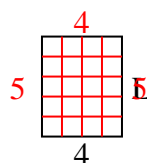
13) Area = $24u^2$



14) Area = $80u^2$



15) Area = $20u^2$



Answers

1. 5

2. 3

3. 3

4. 9

5. 2

6. 10

7. 7

8. 8

9. 5

10. 3

11. 6

12. 9

13. 6

14. 10

15. 5